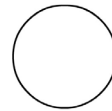
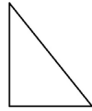


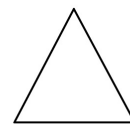

2-D Shapes

Name: _____

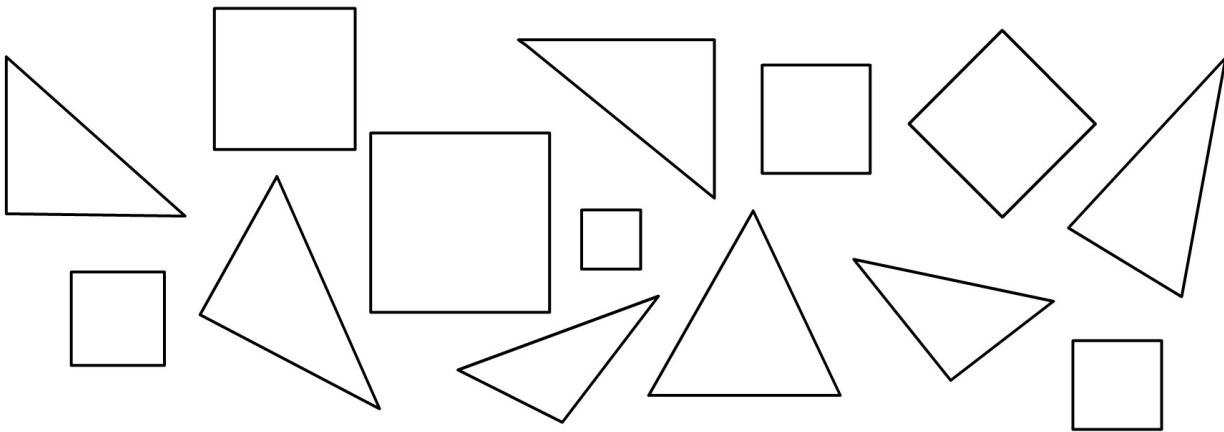
1. Tick (✓) the shape that is a **square**.



2. How many **sides** does each shape have?



3. Colour the **triangles red** and the **squares blue**.



4. Underline the correct answer.



The above shape is like a **ball**.

The above shape is like a **box**.